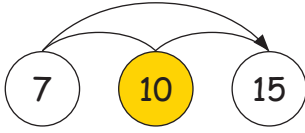


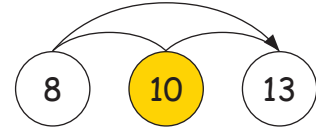
Wieviel fehlen?1. Wieviel fehlt?

Rechne zuerst auf den ganzen Zehner, dann löst du diese Aufgabe leichter.



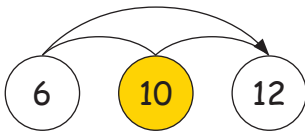
$$7 + \square = 10 + \square = 15$$

$$7 + \square = 15$$



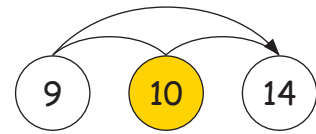
$$8 + \square = 10 + \square = 13$$

$$8 + \square = 13$$



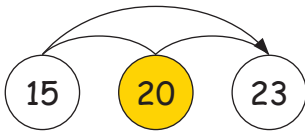
$$6 + \square = 10 + \square = 15$$

$$6 + \square = 15$$



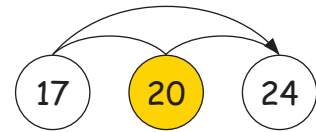
$$9 + \square = 10 + \square = 13$$

$$9 + \square = 13$$



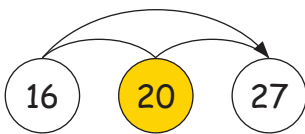
$$15 + \square = 20 + \square = 23$$

$$15 + \square = 23$$



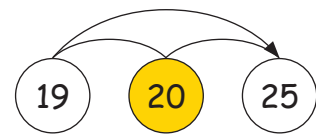
$$17 + \square = 20 + \square = 24$$

$$17 + \square = 24$$



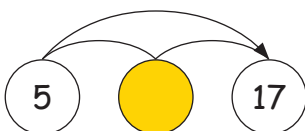
$$16 + \square = 20 + \square = 27$$

$$16 + \square = 27$$



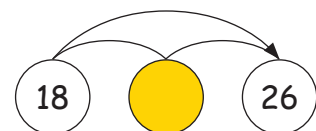
$$19 + \square = 20 + \square = 25$$

$$19 + \square = 25$$



$$5 + \square = \square + \square = 17$$

$$5 + \square = 17$$



$$18 + \square = \square + \square = 26$$

$$18 + \square = 26$$