
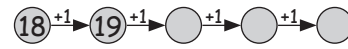


Überschreitungen des zweiten Zehners

1. Über den zweiten Zehner:



18 + 4 = \_\_\_\_\_

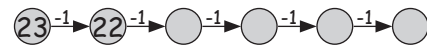


- |                |                |                |                |
|----------------|----------------|----------------|----------------|
| 18 + 3 = _____ | 16 + 7 = _____ | 18 + 7 = _____ | 19 + 7 = _____ |
| 17 + 4 = _____ | 15 + 9 = _____ | 17 + 9 = _____ | 18 + 9 = _____ |
| 19 + 6 = _____ | 17 + 5 = _____ | 16 + 8 = _____ | 16 + 6 = _____ |
| 18 + 5 = _____ | 19 + 8 = _____ | 15 + 6 = _____ | 17 + 8 = _____ |
| 16 + 9 = _____ | 18 + 9 = _____ | 19 + 9 = _____ | 15 + 9 = _____ |

2. Unter den zweiten Zehner:



23 - 5 = \_\_\_\_\_



- |                |                |                |                |
|----------------|----------------|----------------|----------------|
| 22 - 3 = _____ | 28 - 9 = _____ | 21 - 6 = _____ | 21 - 3 = _____ |
| 21 - 4 = _____ | 27 - 8 = _____ | 24 - 7 = _____ | 24 - 8 = _____ |
| 24 - 6 = _____ | 26 - 9 = _____ | 23 - 4 = _____ | 22 - 7 = _____ |
| 23 - 8 = _____ | 24 - 8 = _____ | 22 - 5 = _____ | 25 - 9 = _____ |
| 25 - 7 = _____ | 22 - 4 = _____ | 25 - 6 = _____ | 23 - 6 = _____ |

3. Für jede richtig gelöste Aufgabe bekommst du einen Punkt:

- |                |                |                |                |
|----------------|----------------|----------------|----------------|
| 23 - 8 = _____ | 16 + 8 = _____ | 24 - 6 = _____ | 17 + 5 = _____ |
| 18 + 7 = _____ | 17 + 7 = _____ | 18 + 5 = _____ | 26 - 9 = _____ |
| 19 + 5 = _____ | 22 - 8 = _____ | 23 - 9 = _____ | 18 + 4 = _____ |
| 22 - 6 = _____ | 21 - 2 = _____ | 21 - 5 = _____ | 15 + 8 = _____ |
| 24 - 8 = _____ | 18 + 3 = _____ |                |                |
| 21 - 3 = _____ | 19 + 9 = _____ |                |                |
| 15 + 7 = _____ | 27 - 8 = _____ |                |                |
| 17 + 4 = _____ | 23 - 5 = _____ |                |                |
| 22 - 5 = _____ | 16 + 5 = _____ |                |                |
| 17 + 6 = _____ | 15 + 9 = _____ |                |                |
| 23 - 4 = _____ | 24 - 5 = _____ |                |                |

